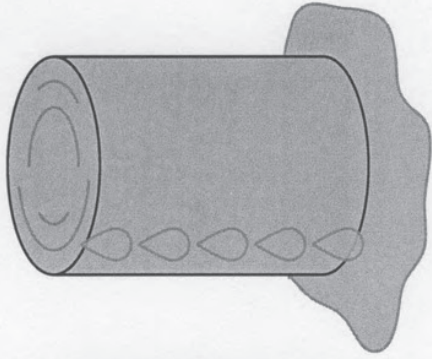



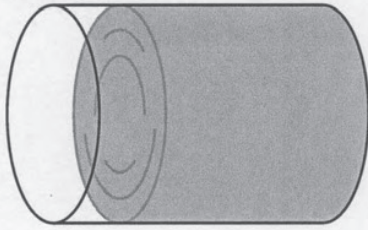
Fractions in Containers



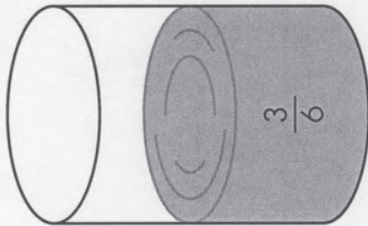
More than
one whole



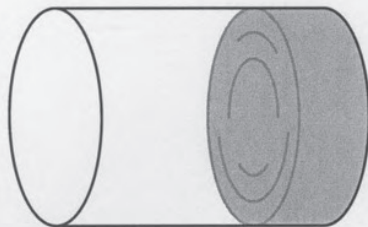
One whole



Between
one half and
one whole



One half



Less than
one half

Write each fraction in the container in which it belongs.

Cross out each fraction as you use it. ($\frac{3}{6}$ has been done for you.)

There are five fractions for each container.

$\frac{3}{6}$	$\frac{5}{5}$	$\frac{1}{4}$	$\frac{5}{2}$	$\frac{1}{5}$	$\frac{2}{2}$	$\frac{3}{5}$	$\frac{5}{7}$	$\frac{6}{3}$	$\frac{2}{5}$	$\frac{2}{4}$	$\frac{3}{3}$
$\frac{10}{20}$	$\frac{3}{10}$	$\frac{10}{5}$	$\frac{2}{6}$	$\frac{3}{2}$	$\frac{6}{5}$	$\frac{10}{10}$	$\frac{4}{8}$	$\frac{4}{5}$	$\frac{8}{8}$	$\frac{6}{12}$	