

Student A

NAME

DATE



ACTIVITY


How Many Grapes?

Read the problem. Show your work.

Mia brought grapes for snack.
She had 5 grapes.
Then she ate 1 of the grapes.



How many grapes did Mia have left?



Student B

NAME

DATE



ACTIVITY


How Many Grapes?

Read the problem. Show your work.

Mia brought grapes for snack.
She had 5 grapes.
Then she ate 1 of the grapes.



How many grapes did Mia have left?



Student C

NAME

DATE



ACTIVITY

How Many Grapes?

Read the problem. Show your work.

Mia brought grapes for snack.
She had 5 grapes.
Then she ate 1 of the grapes.



How many grapes did Mia have left?



ation K

Student D

NAME

DATE



ACTIVITY

How Many Grapes?

Read the problem. Show your work.

Mia brought grapes for snack.
She had 5 grapes.
Then she ate 1 of the grapes.



How many grapes did Mia have left?



Student E

NAME

DATE



ACTIVITY


How Many Grapes?

Read the problem. Show your work.

Mia brought grapes for snack.
She had 5 grapes.
Then she ate 1 of the grapes.



How many grapes did Mia have left?



Student F

NAME

DATE



ACTIVITY


How Many Grapes?

Read the problem. Show your work.

Mia brought grapes for snack.
She had 5 grapes.
Then she ate 1 of the grapes.



How many grapes did Mia have left?



Student G

NAME

DATE




How Many Grapes?

Read the problem. Show your work.

Mia brought grapes for snack.
She had 5 grapes.
Then she ate 1 of the grapes.



How many grapes did Mia have left?



Student H

NAME

DATE



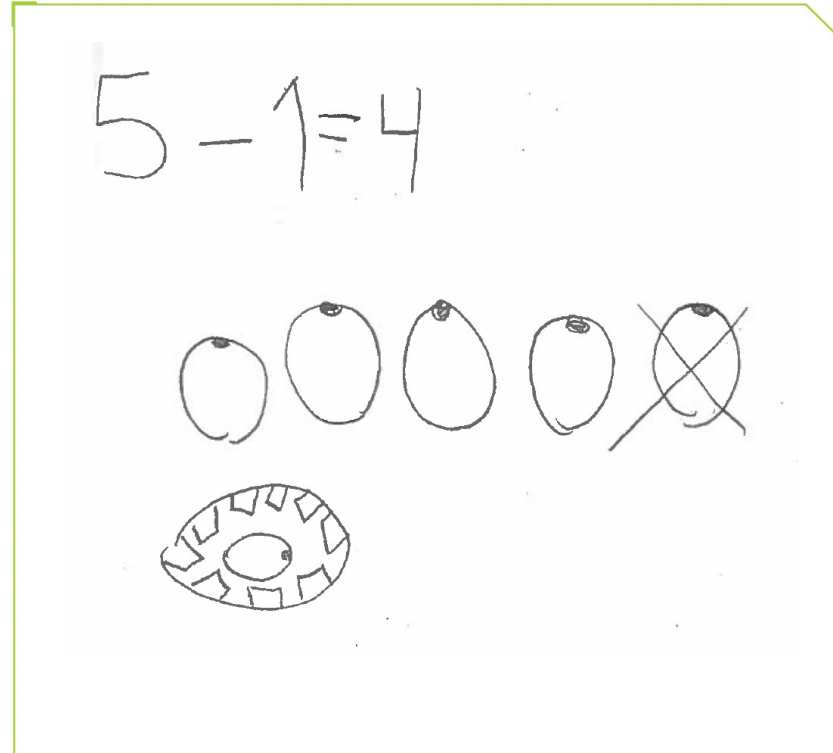
How Many Grapes?

Read the problem. Show your work.

Mia brought grapes for snack.
She had 5 grapes.
Then she ate 1 of the grapes.



How many grapes did Mia have left?



Student I

NAME

DATE



ACTIVITY

How Many Grapes?

Read the problem. Show your work.

Mia brought grapes for snack.
She had 5 grapes.
Then she ate 1 of the grapes.



How many grapes did Mia have left?

$$5 - 1 = 4$$

Student J

NAME

DATE



ACTIVITY

How Many Grapes?

Read the problem. Show your work.

Mia brought grapes for snack.
She had 5 grapes.
Then she ate 1 of the grapes.



How many grapes did Mia have left?

$$4 - 1 = 4$$